

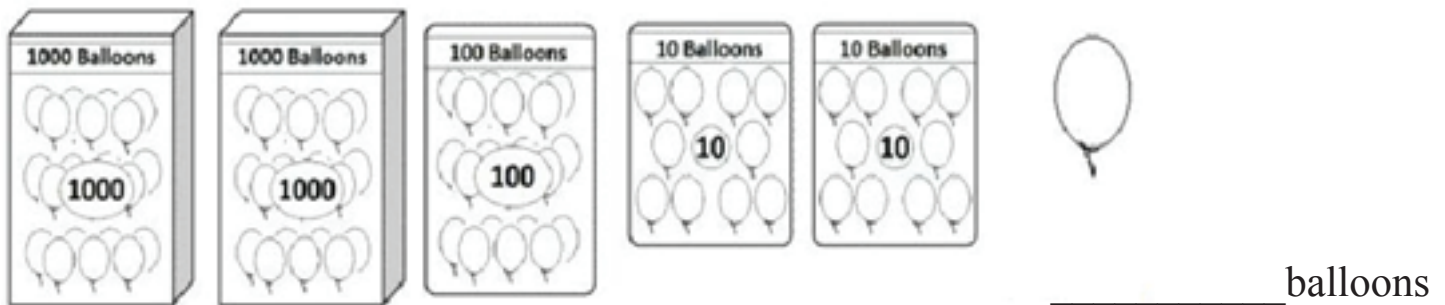
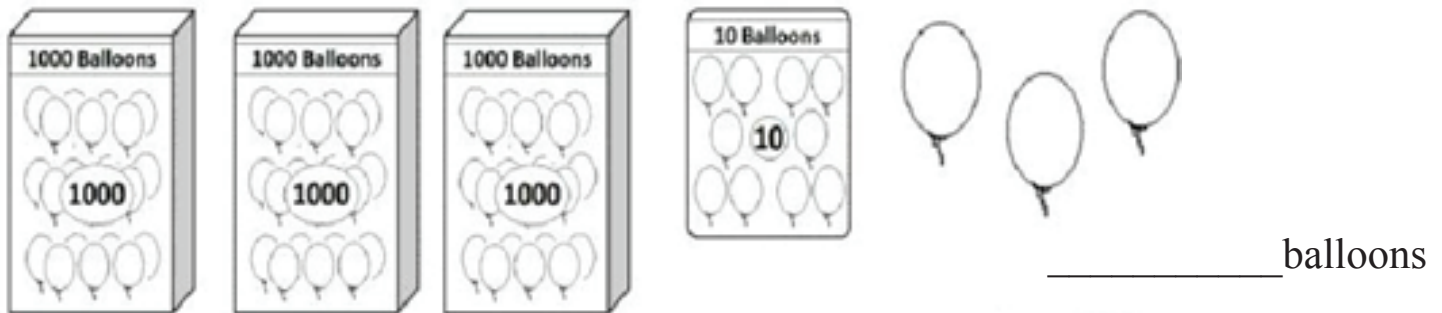
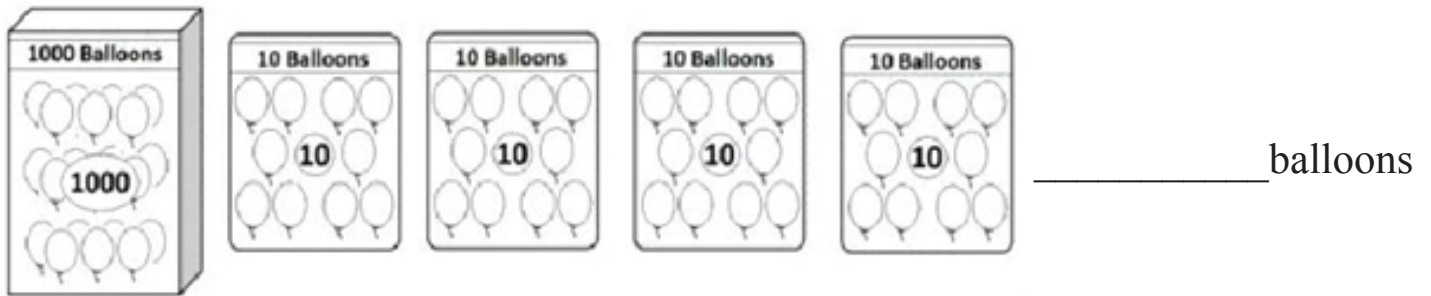
CHAPTER I PLACE VALUE

Class : III
Subject : Maths



A. WORKSHEET

I. Identify the numbers







II . Round to the nearest 10.

Number	Nearest 10
89	
72	
35	

B. CAMBRIDGE ACTIVITY

Use the following digit on the playing cards to answer the questions.
Each digit can only be used once per question.



1. What is the largest 3 digit number you can make with these digits?
2. What is the largest 4 digit number that these digits can form?
3. What is the smallest 4 digit number you can make?
4. What is the largest 3 digit number you can make with a 2 in the tens place?
5. What is the smallest 4 digit number you can make with a 6 in the thousands place?
6. What is the smallest odd number you can make with these 4 digits?

C. MATH ONLINE ACTIVITY:

<https://www.youtube.com/watch?v=irxBC3nNvnY&feature=youtu.be>

Complete the following tabular column using place value.

Where's my place?

3839

9292

1957

3594

6492

5573

4602

3649

8274

3564

7456

8754

4743

6258

2485

8583

7457

3785

4873

5653

D. LAB ACTIVITY:

<https://www.youtube.com/watch?v=A9GgbXuCCgc>

Do the activity based on the link given above in your own way.